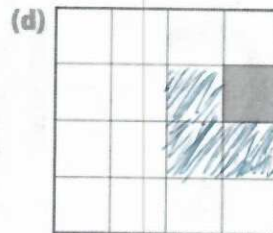
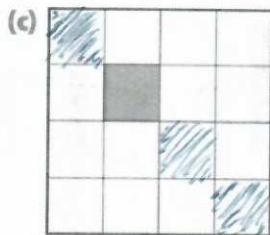
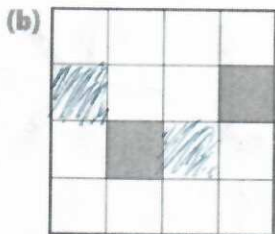
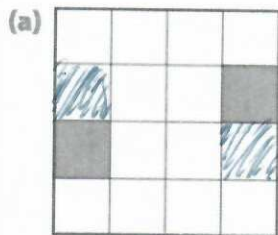


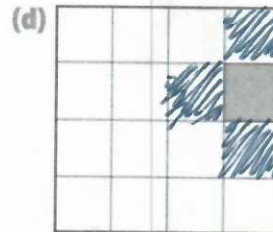
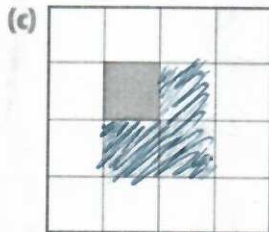
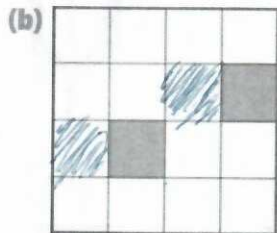
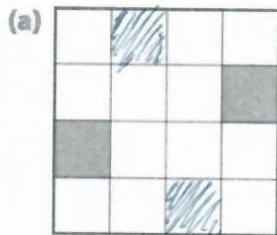
1. (2 pts) For the following figures do what is asked:

- Shade 2 squares so that it has exactly 2 lines of symmetry
- Shade 2 squares so that it has exactly 1 line of symmetry
- Shade 3 squares so that it has exactly 2 lines of symmetry
- Shade 3 squares so that it has exactly 1 line of symmetry



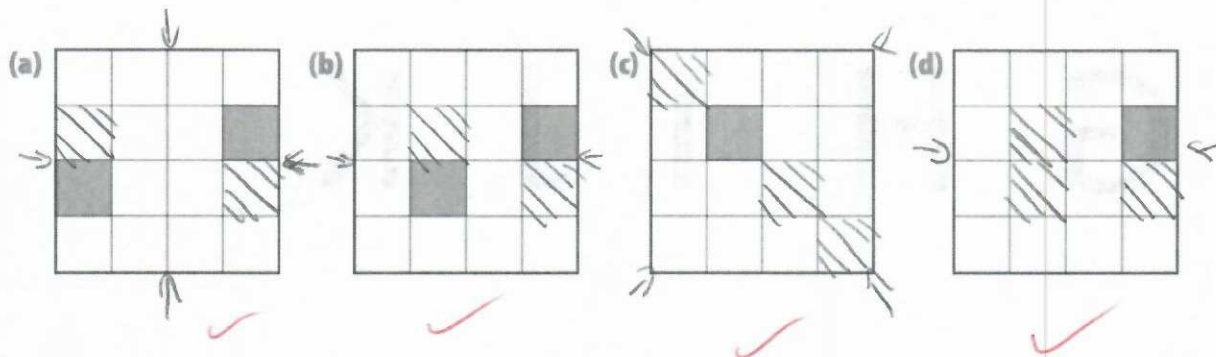
2. (2 pts) For the following figures do what is asked:

- Shade 2 squares so that it has order of rotation symmetry 4
- Shade 2 squares so that it has order of rotation symmetry 2
- Shade 3 squares so that it has order of rotation symmetry 4
- Shade 3 squares so that it has order of rotation symmetry 1



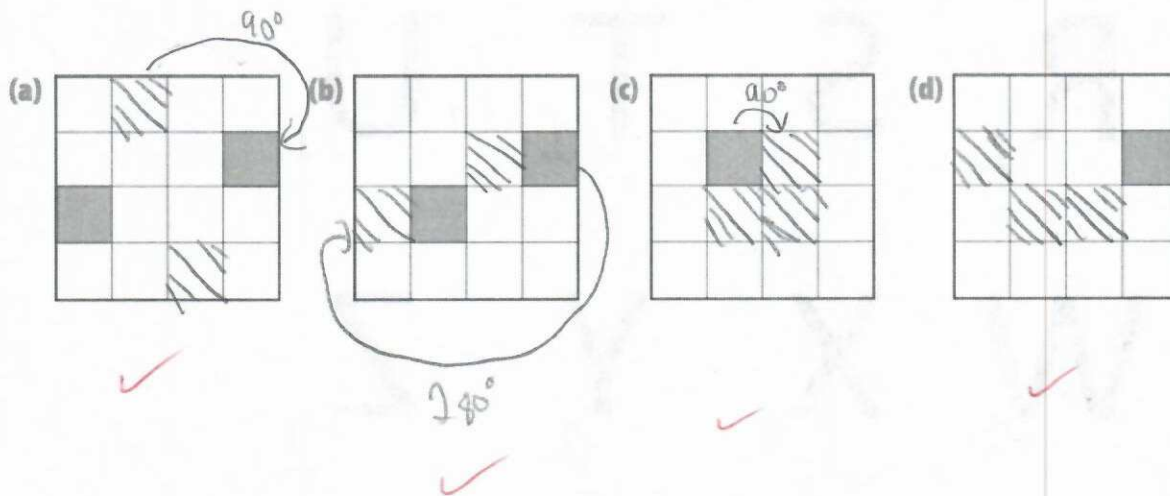
1. (2 pts) For the following figures do what is asked:

- Shade 2 squares so that it has exactly 2 lines of symmetry
- Shade 2 squares so that it has exactly 1 line of symmetry
- Shade 3 squares so that it has exactly 2 lines of symmetry
- Shade 3 squares so that it has exactly 1 line of symmetry



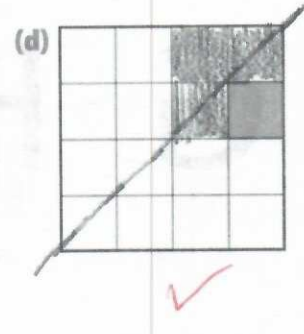
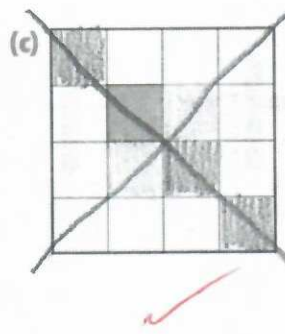
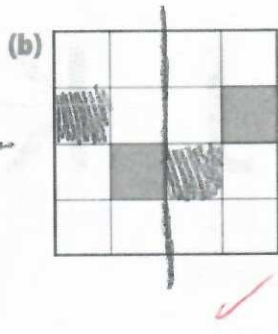
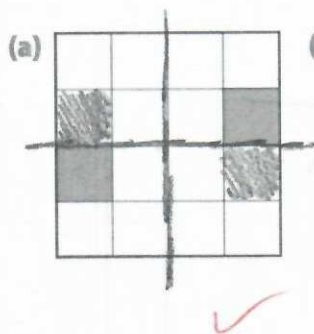
2. (2 pts) For the following figures do what is asked:

- Shade 2 squares so that it has order of rotation symmetry 4
- Shade 2 squares so that it has order of rotation symmetry 2
- Shade 3 squares so that it has order of rotation symmetry 4
- Shade 3 squares so that it has order of rotation symmetry 1



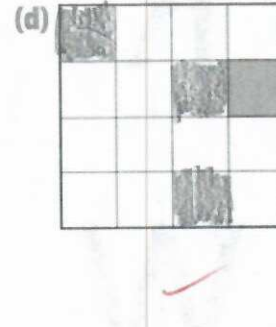


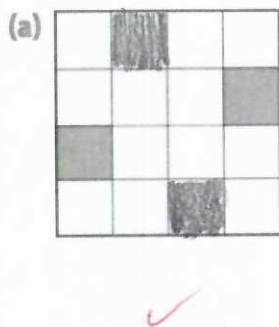
1. (2 pts) For the following figures do what is asked:

- Shade 2 squares so that it has exactly 2 lines of symmetry
- Shade 2 squares so that it has exactly 1 line of symmetry
- Shade 3 squares so that it has exactly 2 lines of symmetry
- Shade 3 squares so that it has exactly 1 line of symmetry



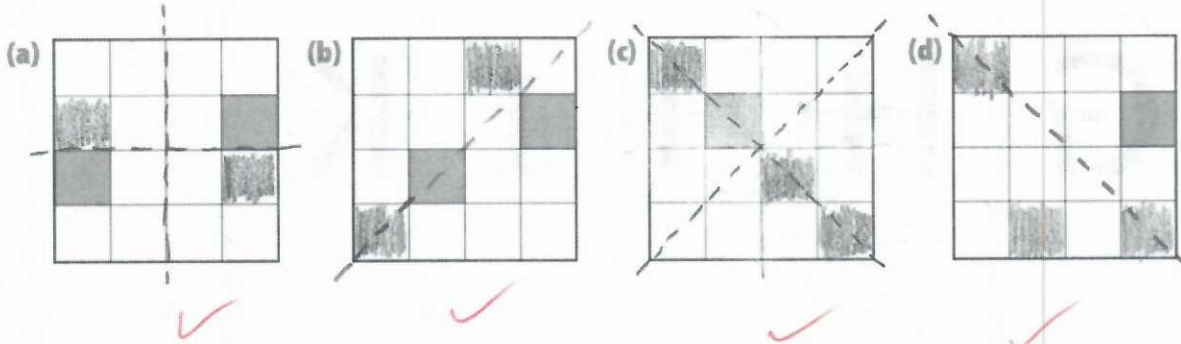
2. (2 pts) For the following figures do what is asked:

- Shade 2 squares so that it has order of rotation symmetry 4
- Shade 2 squares so that it has order of rotation symmetry 2
- Shade 3 squares so that it has order of rotation symmetry 4
- Shade 3 squares so that it has order of rotation symmetry 1



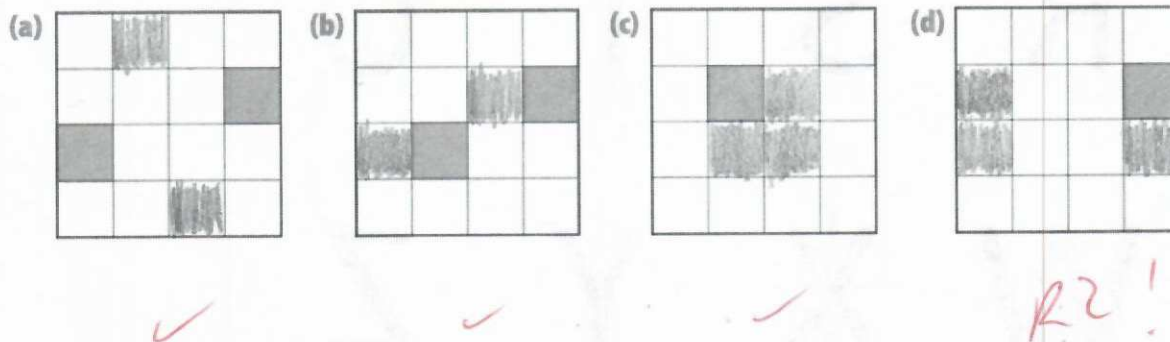
1. (2 pts) For the following figures do what is asked:

- Shade 2 squares so that it has exactly 2 lines of symmetry
- Shade 2 squares so that it has exactly 1 line of symmetry
- Shade 3 squares so that it has exactly 2 lines of symmetry
- Shade 3 squares so that it has exactly 1 line of symmetry



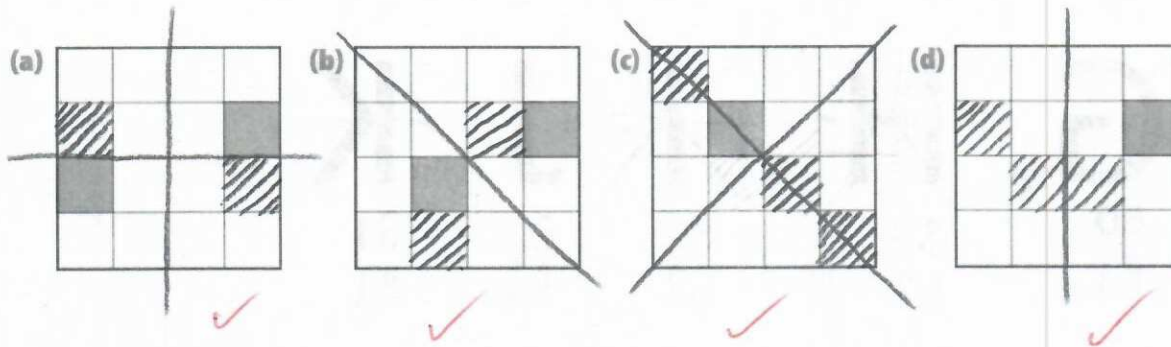
2. (2 pts) For the following figures do what is asked:

- Shade 2 squares so that it has order of rotation symmetry 4
- Shade 2 squares so that it has order of rotation symmetry 2
- Shade 3 squares so that it has order of rotation symmetry 4
- Shade 3 squares so that it has order of rotation symmetry 1



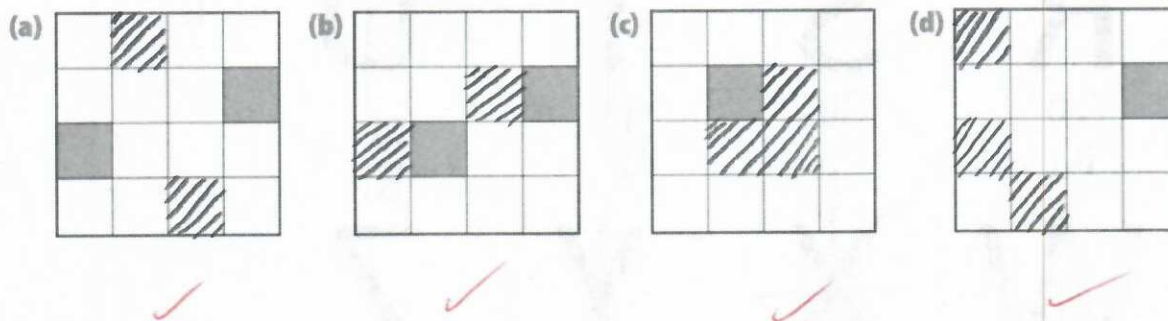
1. (2 pts) For the following figures do what is asked:

- a. Shade 2 squares so that it has exactly 2 lines of symmetry
- b. Shade 2 squares so that it has exactly 1 line of symmetry
- c. Shade 3 squares so that it has exactly 2 lines of symmetry
- d. Shade 3 squares so that it has exactly 1 line of symmetry



2. (2 pts) For the following figures do what is asked:

- a. Shade 2 squares so that it has order of rotation symmetry 4
- b. Shade 2 squares so that it has order of rotation symmetry 2
- c. Shade 3 squares so that it has order of rotation symmetry 4
- d. Shade 3 squares so that it has order of rotation symmetry 1



3. (6 pts) For each letter draw all lines of symmetry, and **below each letter** write the order of rotational symmetry (e.g. "R2").

A
R1

B
R1

C
R1

D
R1

E
R1

F
R1

no line of symmetry

G
R1

no line

H
R2

I
R2

J
R1

no line

K
R1

L
R1

no line

M
R1

no line

N
R2

no line

O
R2

but could argue more if perfect circle

P
R1

no line

Q
R1

no line

R
R1

no line

S
R2

no line

T
R1

no line

U
R1

no line

How many more?

V
R1

no line

W
R1

no line

X
R2

no line

but could argue R4 if it were a perfect cross

Y
R1

no line

Z
R2

no line

3. (6 pts) For each letter draw all lines of symmetry, and **below each letter** write the order of rotational symmetry (e.g. "R2").

A
order 1

B
order 1
No Symmetry based on the fact the top of the B is smaller
Good

C
order 1

D
order 1

E
order 1

F
order 1

G
order 1

H
order 2

I
order 2

J
order 1

K
order 1
No Symmetry if upper part is smaller
✓

L
order 1

M
order 1

N
order 2

O
order 2

P
order 1

Q
order 1

R
order 1

S
could be order 2 if top half wasn't smaller
✓

T
order 1

U
order 1

V
order 1



























W
order 1

X
order 2

Y
order 1

Z
order 2

3. (6 pts) For each letter draw all lines of symmetry, and **below each letter** write the order of rotational symmetry (e.g. "R2").

 R1	 R1	 R2	 R1	 R1	
 R1	 R1	 R2	 R2	 R1	 R1
 R1	 R1	 R2	 R2	 R1	
 R1	 R1	 R2	 R1	 R1	
 R1	 R1	 R2	 R1	 R2	

3. (6 pts) For each letter draw all lines of symmetry, and below each letter write the order of rotational symmetry (e.g. "R2").

1 Symmetry
1 rotation
or no way other than itself

1 Symmetry
rotation 1 or none

1 or none

1 or none

or only fits on itself 1 way
1 or none

No lines of Symm.
1 or no rotation

No lines of Symmetry
1 or no rotation

2 rotations ✓
2 Symmetry
R2

2 rotations
1 line Sym
2 rotation

No Sym
no rotation

1 line of sym
no order of rotation or 1

No line Sym
no rotation

1 line Sym
no rotation or 1 order

No line of Sym
2 rotations ✓

Infinite ways
ok!

No line of Sym
no rotation or order of 1

no lines sym
1 or no rotation

No lines Sym
no rotation

No Symmetry
2 rotations ✓

1 line Sym
no rotation

1 line Sym
no rotation or 1 order

1 line of Symm.
1 order of rotation or none

1 line of Sym
1 Order of rotation or none
only fits on itself once

2 lines of Sym
2 order of rotation ✓

1 Line Symm.
1 order of rotation or none

no line of Symm.
2 order of rotation ✓

Good!